

Riemann Sums and Area Under a Curve

Author Aaron Tresham

Date 2017-06-09T20:00:33

Project a8975d68-235e-4f21-8635-2051d699f504

Location [13 - Riemann Sums Assignment/Riemann Sums Notes.sagews](#)

Original file [Riemann Sums Notes.sagews](#)

Riemann Sums and Area Under a Curve

Suppose we want to know the area between the graph of a positive function $f(x)$ and the x-axis from $x = a$ to $x = b$.

For most functions, this region is not a shape whose area we can find simply using geometry. So we will approximate the area using a simple geometric shape: the rectangle. Now using only one rectangle would give us a pretty poor approximation most of the time, so we should use many rectangles. Here is the approach:

- Divide the interval $[a, b]$ into n subintervals of equal width (this assumption is unnecessary, but it will simplify things).
- We'll call this width Δx . Since all the widths are the same, we have $\Delta x = \frac{b-a}{n}$.
- We'll label the endpoints of the intervals x_i : $x_0 = a$, $x_1 = a + \Delta x$, $x_2 = a + 2\Delta x$, \dots , $x_n = a + n\Delta x = b$.
- If each subinterval $[x_{i-1}, x_i]$ is relatively small, then the function values on this subinterval are all approximately the same (i.e., $f(c) \approx f(d)$ for any c and d in the subinterval).
- Choose any c_i in the subinterval $[x_{i-1}, x_i]$.
- The area under the graph of f on this subinterval is approximately $f(c_i)\Delta x$ (this is the area of the rectangle with one side along the x-axis from x_{i-1} to x_i and two vertical sides from the x-axis up to $f(c_i)$).
- To get the total area under the graph of f on the interval $[a, b]$, we add up all our approximations:

$$\text{Area} \approx \sum_{i=1}^n f(c_i)\Delta x$$

This is called a **Riemann Sum**, after German mathematician Bernhard Riemann (1826-1866).

If c_i is chosen to be the left endpoint of each subinterval, then the resulting Riemann sum is called a **Left Riemann Sum** (I'll abbreviate it LS).

$$LS = \sum_{i=1}^n f(x_{i-1})\Delta x = \sum_{i=0}^{n-1} f(x_i)\Delta x$$

(note that LS depends on n).

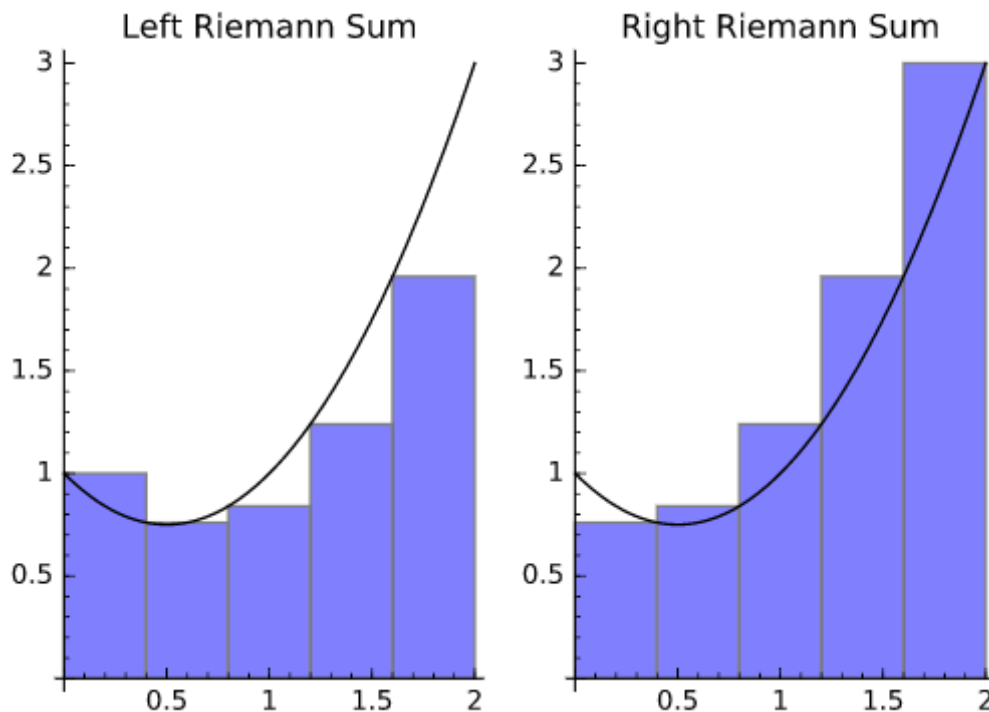
If c_i is chosen to be the right endpoint of each subinterval, then the resulting Riemann sum is called a **Right Riemann Sum** (I'll abbreviate it RS).

$$RS = \sum_{i=1}^n f(x_i)\Delta x$$

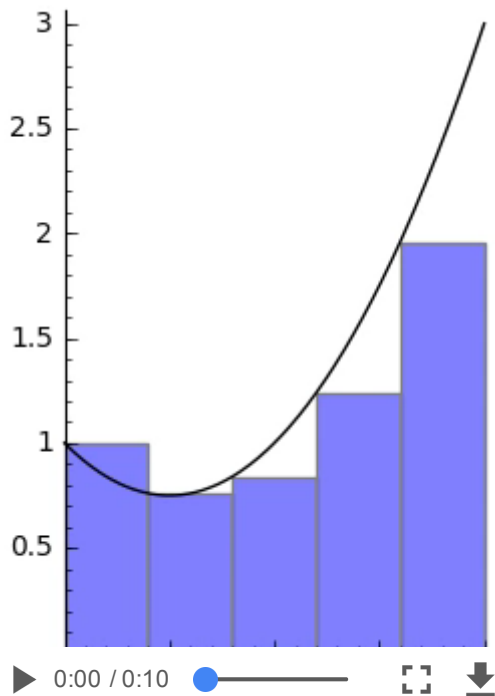
(note that RS depends on n).

Example 1

Here are pictures of the rectangles that make up the left and right Riemann sums for the function $f(x) = x^2 - x + 1$ from $x = 0$ to $x = 2$ with $n = 5$ subintervals.



The animation below shows graphs of left Riemann sums for increasing values of n . You can see that the rectangles begin to fill in the area under the curve.



1

Definite Integrals

To get a better approximation, we make the subintervals smaller by increasing n (the number of subintervals).

We then define the area as

$$Area = \lim_{n \rightarrow \infty} \sum_{i=1}^n f(c_i) \Delta x$$

(provided this limit exists).

It can be shown (although I won't do it) that this limit exists for many functions (and it does not depend on the choice of c_i). In particular, this limit exists if the function f is continuous on the interval $[a, b]$.

I have assumed that the function f is positive on the interval $[a, b]$. If this is not the case, then some $f(c_i)$ may be negative, in which case $f(c_i) \Delta x$ would not be the area of the corresponding rectangle, but the opposite of this area (a negative number).

In calculus, we will decree that regions below the x-axis have negative area, while regions above the x-axis have positive area. Therefore, the area formula given above will still work, provided we think not of the geometric area of the region but of the "signed area."

Because of its importance, there is special notation for the limit of Riemann sums given above:

$$\int_a^b f(x) dx = \lim_{n \rightarrow \infty} \sum_{i=1}^n f(c_i) \Delta x$$

This quantity is called the **Definite Integral** of the function f from $x = a$ to $x = b$.

In this lab, we will compute values of Riemann sums using the "sum" command in Sage. Next time we will compute integrals using the "integral" command.

The sum command takes four arguments: sum(expression, variable of summation, starting value, ending value)

Make sure you declare your summation variable before using it.

Here some examples.

$$\sum_{k=0}^{10} k^2 = 385$$

```
2 %var k
3 sum(k^2, k, 0, 10)
```

385

$$\sum_{i=1}^5 \frac{1}{i} = \frac{137}{60}$$

```
4 %var i
5 sum(1/i, i, 1, 5)
```

137/60

For $f(x) = x^3$, $\sum_{n=0}^{20} \frac{f(n)}{f(n+1)} = \frac{3829036719783221149071997}{280346265322438720204800} \approx 13.6582$.

```
6 %var n
7 f(x)=x^3
8 sum(f(n)/f(n+1), n, 0, 20)
9 N(_)
```

3829036719783221149071997/280346265322438720204800
13.6582405168811

Example 2

Approximate the area between the graph of $f(x) = x^2 - x + 1$ and the x-axis from $x = 0$ to $x = 2$ using left and right Riemann sums with $n = 5$, $n = 10$, and $n = 50$ subintervals.

First, the solution with $n = 5$.

```
10 f(x)=x^2-x+1 #function
11 a=0          #lower limit
12 b=2          #upper limit
13 n=5          #number of subintervals
14 dx=(b-a)/n  #delta x
15 %var i
16 LS=sum(f(a+i*dx)*dx,i,0,n-1) #calculates left sum; remember, x_i=a+i*dx
17 print 'The left Riemann sum is',N(LS)
18 RS=sum(f(a+i*dx)*dx,i,1,n)   #calculates right sum
19 print 'The right Riemann sum is',N(RS)
```

```
The left Riemann sum is 2.32000000000000
The right Riemann sum is 3.12000000000000
```

Now $n = 10$.

```
20 f(x)=x^2-x+1 #function
21 a=0          #lower limit
22 b=2          #upper limit
23 n=10         #number of subintervals
24 dx=(b-a)/n  #delta x
25 %var i
26 LS=sum(f(a+i*dx)*dx,i,0,n-1) #calculates left sum
27 print 'The left Riemann sum is',N(LS)
28 RS=sum(f(a+i*dx)*dx,i,1,n)   #calculates right sum
29 print 'The right Riemann sum is',N(RS)
```

```
The left Riemann sum is 2.48000000000000
The right Riemann sum is 2.88000000000000
```

Finally, $n = 50$.

```
30 f(x)=x^2-x+1 #function
31 a=0          #lower limit
32 b=2          #upper limit
33 n=50         #number of subintervals
34 dx=(b-a)/n  #delta x
35 %var i
36 LS=sum(f(a+i*dx)*dx,i,0,n-1) #calculates left sum
37 print 'The left Riemann sum is',N(LS)
38 RS=sum(f(a+i*dx)*dx,i,1,n)   #calculates right sum
39 print 'The right Riemann sum is',N(RS)
```

The left Riemann sum is 2.62720000000000
The right Riemann sum is 2.70720000000000

You can see that the left and right Riemann sums get closer together as n increases (they are both getting closer to the actual area).

The actual area is $\frac{8}{3} \approx 2.6667$. This gives you some idea of how big n needs to be in order to get a good approximation.

Fortunately, there are much better ways to approximate areas! We'll talk about some of these in Math 206.

Example 3

Approximate the area between the graph of $f(x) = \sin(x)$ and the x-axis from $x = 0$ to $x = \frac{\pi}{2}$ using left and right Riemann sums with $n = 50$ and $n = 100$ subintervals.

[Note: The actual area is 1.]

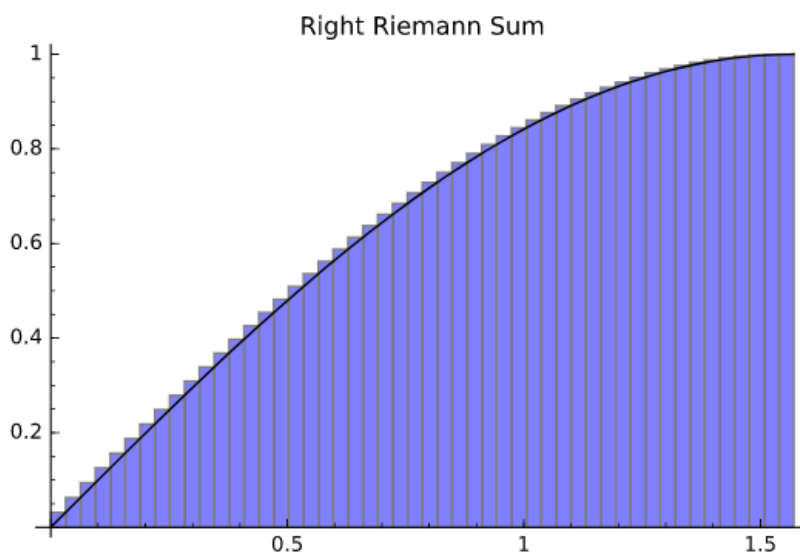
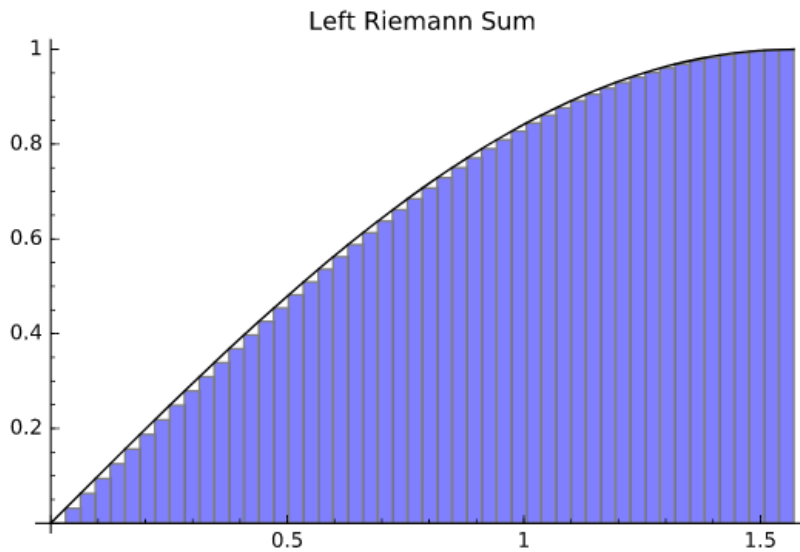
First, we'll use $n = 50$.

```
40 f(x)=sin(x) #function
41 a=0         #lower limit
42 b=pi/2     #upper limit
43 n=50       #number of subintervals
44 dx=(b-a)/n #delta x
45 %var i
46 LS=sum(f(a+i*dx)*dx,i,0,n-1) #calculates left sum
47 print 'The left Riemann sum is',N(LS)
48 RS=sum(f(a+i*dx)*dx,i,1,n)   #calculates right sum
49 print 'The right Riemann sum is',N(RS)
```

The left Riemann sum is 0.984209788675773

The right Riemann sum is 1.01562571521167

Here are graphs for the left and right Riemann sums with $n = 50$:



Now we'll use $n = 100$.

```

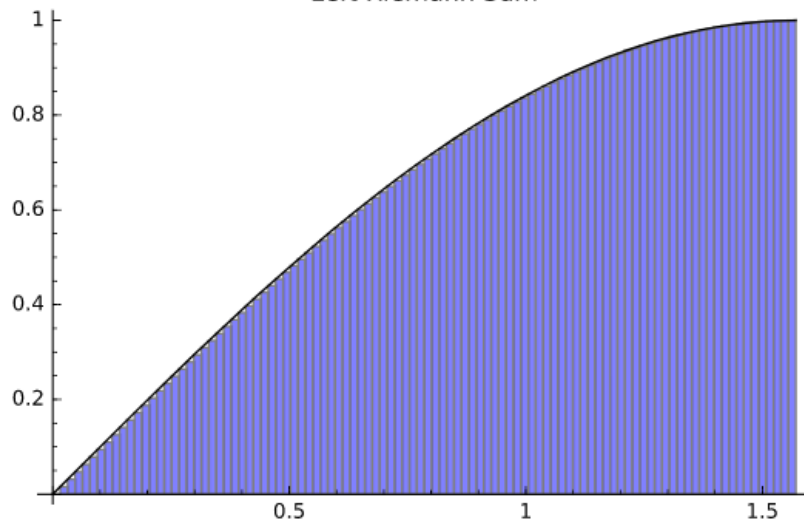
50 f(x)=sin(x) #function
51 a=0         #lower limit
52 b=pi/2     #upper limit
53 n=100      #number of subintervals
54 dx=(b-a)/n #delta x
55 %var i
56 LS=sum(f(a+i*dx)*dx,i,0,n-1) #calculates left sum
57 print 'The left Riemann sum is',N(LS)
58 RS=sum(f(a+i*dx)*dx,i,1,n)   #calculates right sum
59 print 'The right Riemann sum is',N(RS)

```

The left Riemann sum is 0.992125456605633
 The right Riemann sum is 1.00783341987358

Here are the graphs for $n = 100$.

Left Riemann Sum



Right Riemann Sum

